

Date:

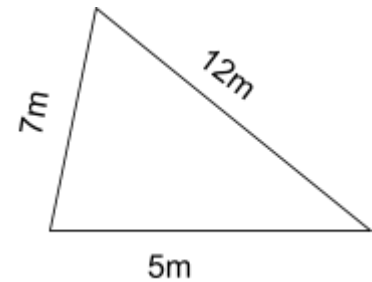
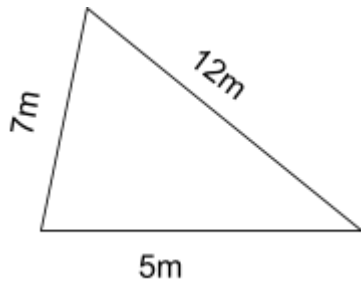
## Grade 7: Math

### 4.2 Geometry: Congruent Shapes

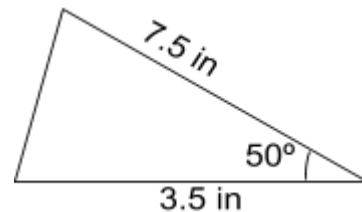
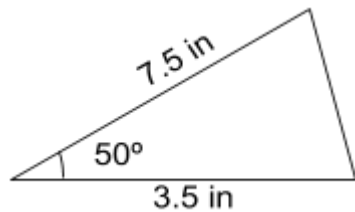
- Congruent shapes are shapes with same size and shape.

Figure A	Figure B
----------	----------

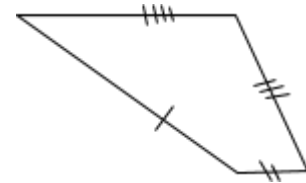
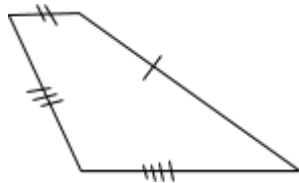
1.



2.



3.



4.



5. When are two squares congruent?

6. Sketch a triangle on dot paper (with all sides different) and then draw another triangle congruent to it.

- Homework: Please complete problems #1-9 on pages 257-259